




Wie spät ist es ?




___ Uhr




___ Uhr




___ Uhr




___ Uhr




___ Uhr



___ Uhr

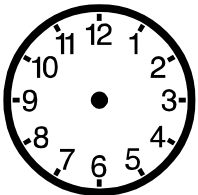


___ Uhr

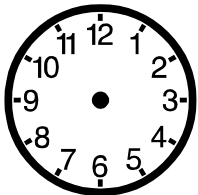


___ Uhr

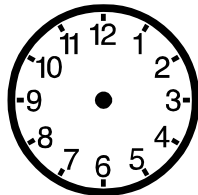
Wohin mit den Zeigern ?



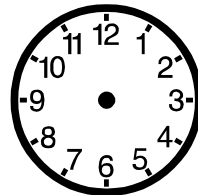
2 Uhr



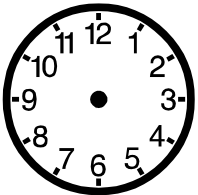
3 Uhr



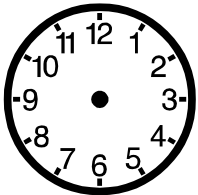
9 Uhr



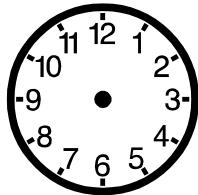
6 Uhr



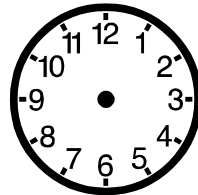
5 Uhr



11 Uhr



4 Uhr



8 Uhr