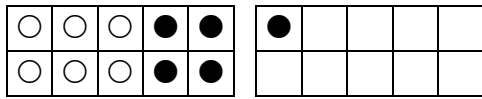
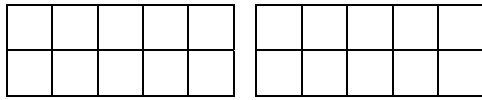


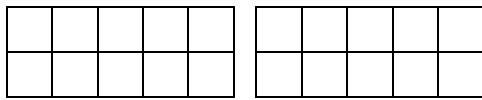
Zeichne und rechne:



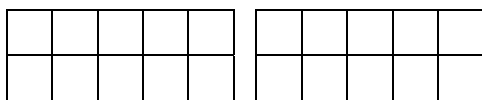
$$\bigcirc \xrightarrow{6 + 5 =} \bigcirc \xrightarrow{\text{---}} \bigcirc$$



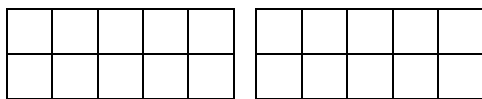
$$\bigcirc \xrightarrow{8 + 3 =} \bigcirc \xrightarrow{\text{---}} \bigcirc$$



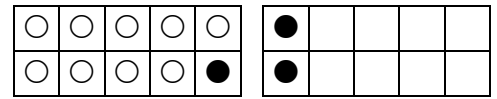
$$\bigcirc \xrightarrow{7 + 5 =} \bigcirc \xrightarrow{\text{---}} \bigcirc$$



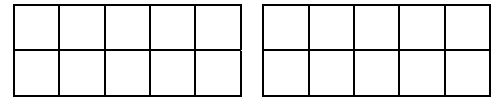
$$\bigcirc \xrightarrow{9 + 4 =} \bigcirc \xrightarrow{\text{---}} \bigcirc$$



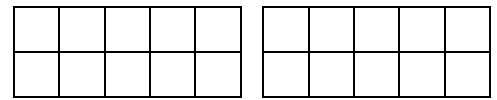
$$\bigcirc \xrightarrow{5 + 8 =} \bigcirc \xrightarrow{\text{---}} \bigcirc$$



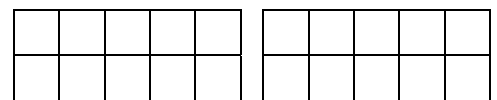
$$\bigcirc \xrightarrow{12 - 3 =} \bigcirc \xrightarrow{\text{---}} \bigcirc$$



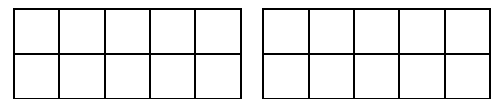
$$\bigcirc \xrightarrow{11 - 5 =} \bigcirc \xrightarrow{\text{---}} \bigcirc$$



$$\bigcirc \xrightarrow{13 - 4 =} \bigcirc \xrightarrow{\text{---}} \bigcirc$$



$$\bigcirc \xrightarrow{15 - 6 =} \bigcirc \xrightarrow{\text{---}} \bigcirc$$



$$\bigcirc \xrightarrow{14 - 7 =} \bigcirc \xrightarrow{\text{---}} \bigcirc$$

Unter und über den Zehner: