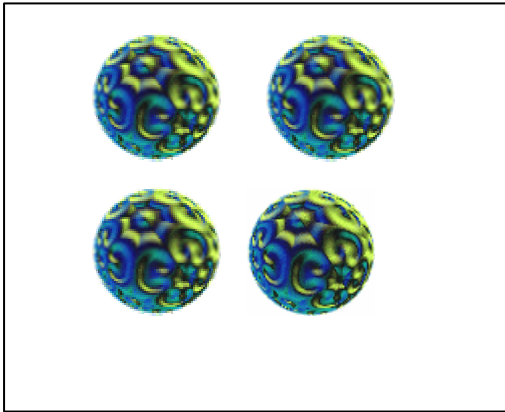


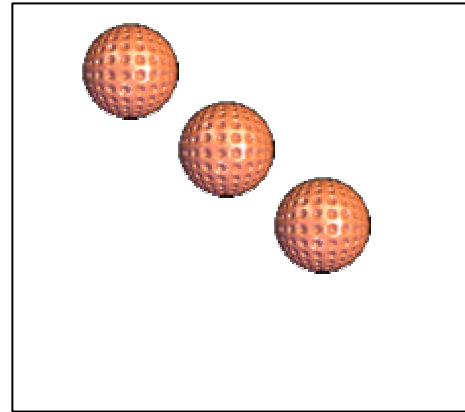
Anleitung:

- .) Seite 8, 11, 12: Dinge zählen, dann Rechnung auf die Linie schreiben.
- .) Seite 9: Dinge zählen, richtige Zahl in das große Feld schreiben. Weiter unten sollen die Kinder selber etwas hineinzeichnen, dann die richtige Zahl in das zweite große Feld schreiben.
- .) Seite 13, 14, 15 Rechnungen im ZR 7.


RICHTIGE ZAHL EINKREISEN




1 2 3 4



1 2 3 4



1 2 3 4



1 2 3 4

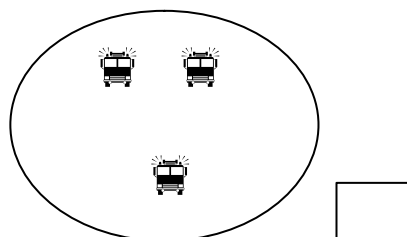
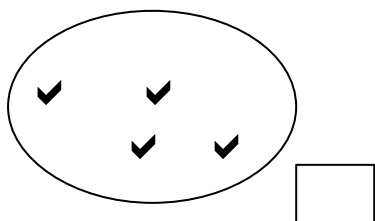
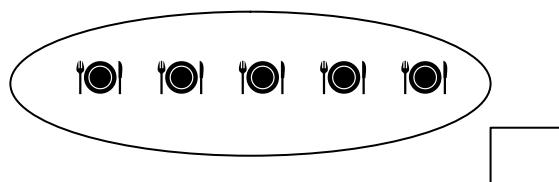
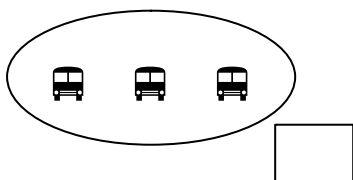
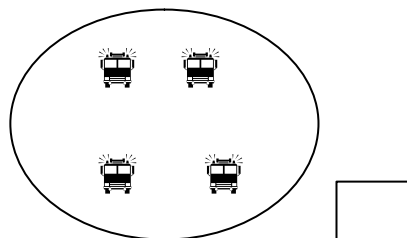
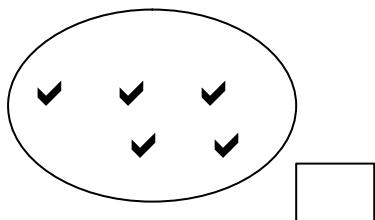
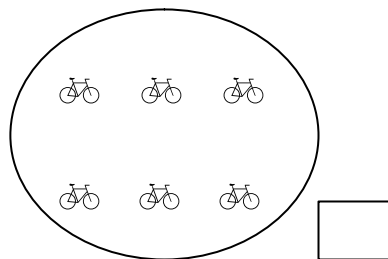
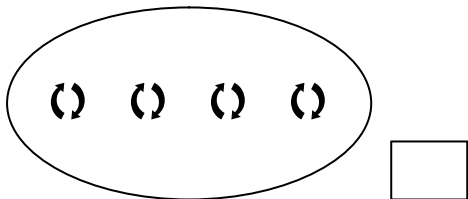



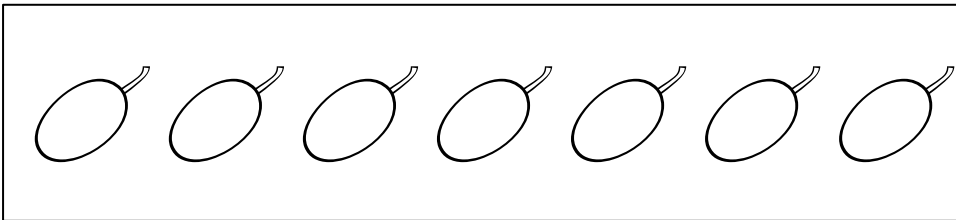
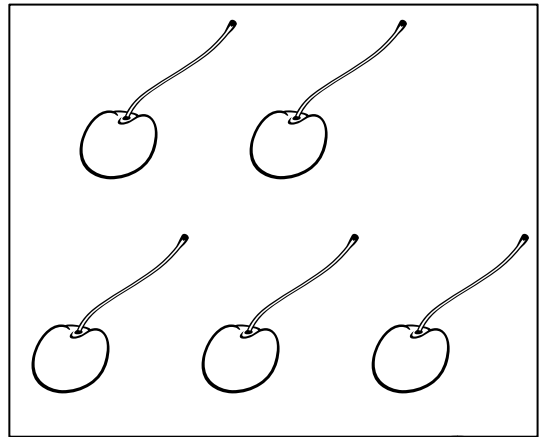
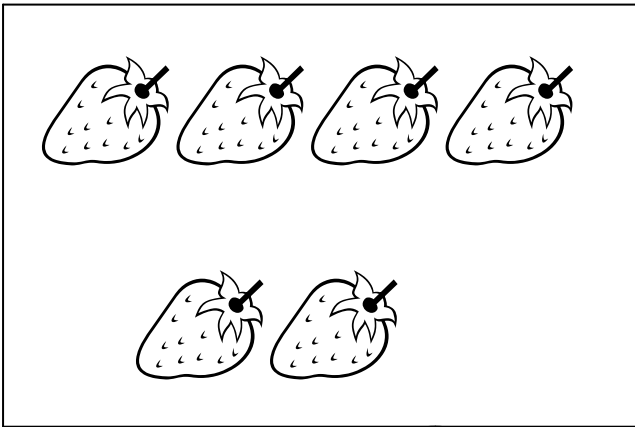
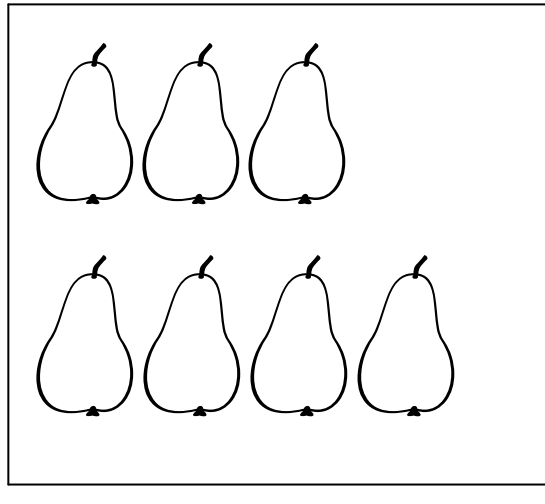

1 2 3 4






1 2 3 4







DAS IST LEICHT! ZÄHLE, DANN SCHREIBE DIE RICHTIGE ZAHL IN DAS LEERE KÄSTCHEN





ZEICHNE SO VIELE WÜRFELAUGEN DU SIEHST, SO VIELE HÄUSER; EIS, BÄLLE ...
ZEICHNEST DU IN DAS LEERE FELD !

$$\square \square \square \square + \square \square = \underline{\quad}$$

$$\square \square \square + \square \square \square \square = \underline{\quad}$$



$$\square \square + \square \square \square = \underline{\quad}$$

$$\square \square \square \square + \square = \underline{\quad}$$



$$\text{apple} + \text{apple} + \text{apple} + \text{apple} + \text{apple} = \underline{\quad}$$

$$\text{apple} + \text{apple} + \text{apple} + \text{apple} = \underline{\quad}$$



$$\text{apple} + \text{apple} + \text{apple} + \text{apple} + \text{apple} + \text{apple} = \underline{\quad}$$

 +  =



3 + 3 =

 +  =



___ + ___ =

 +  =

___ + ___ =

 +  =

___ + ___ =

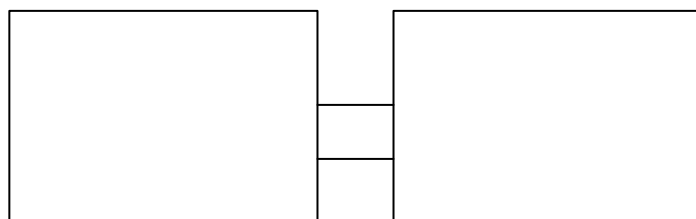
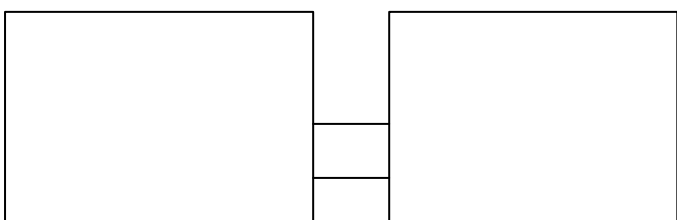
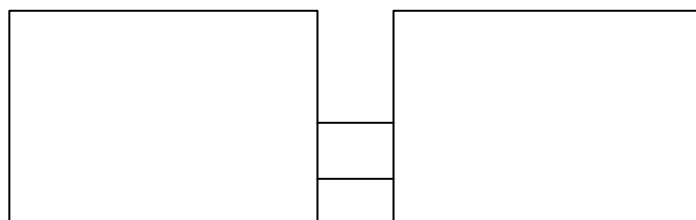
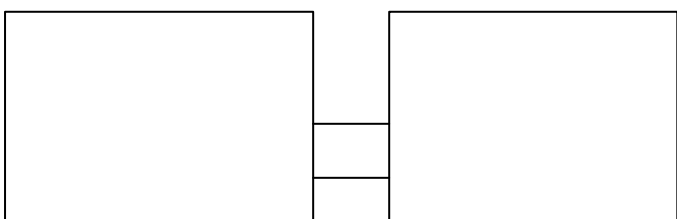
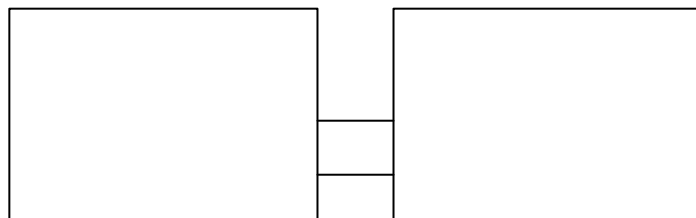
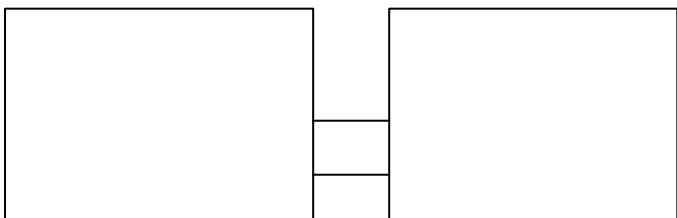
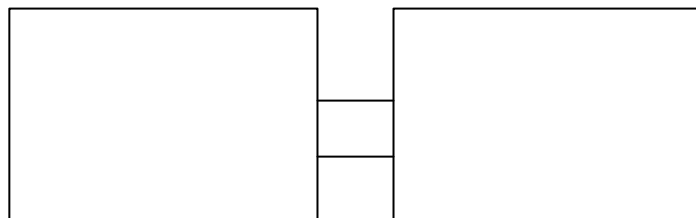
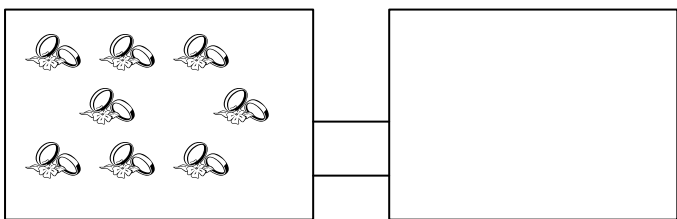
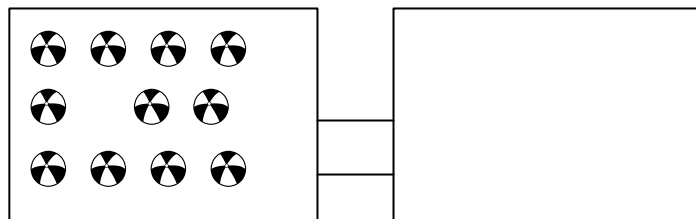
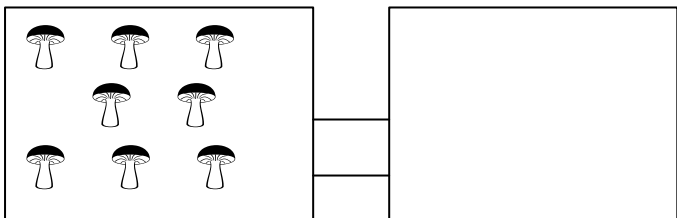
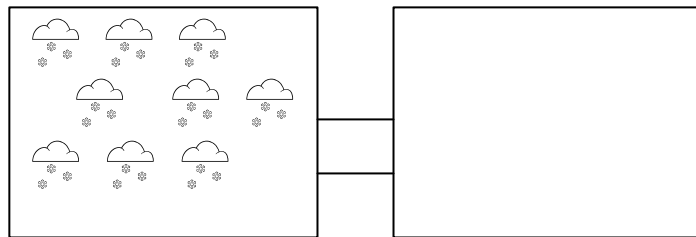
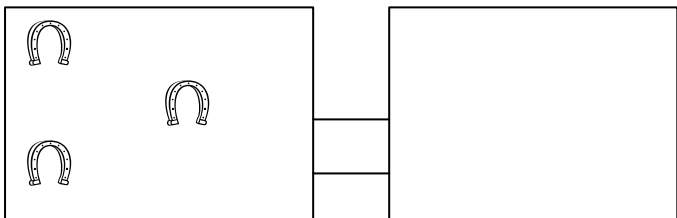
 +  =

___ + ___ =

4 + 2 =










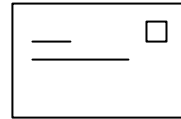

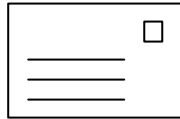
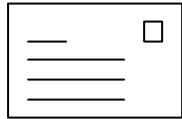

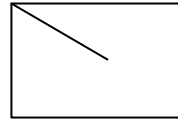
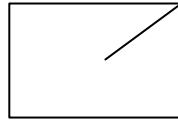
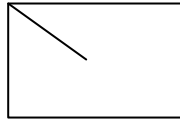
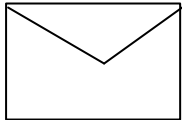
5 + 2 =

3 + 1 =





ES FEHLT IMMER ETWAS. ZEICHNE DAZU!





POST

P . ST

POS .

PO . T

P . ST





$$3 + 2 = \underline{\quad}$$



$$\underline{\quad} + \underline{\quad} = \underline{\quad}$$



$$\underline{\quad} + \underline{\quad} = \underline{\quad}$$



$$\underline{\quad} + \underline{\quad} = \underline{\quad}$$



 +  = _____

_____ + _____ = _____



 +  = _____

_____ + _____ = _____



 +  = _____

_____ + _____ = _____



 +  = _____

_____ + _____ = _____

$3 + 4 = \underline{\quad}$

$2 + 2 = \underline{\quad}$

$5 + 1 = \underline{\quad}$

$2 + 3 = \underline{\quad}$

$1 + 4 = \underline{\quad}$

$4 + 3 = \underline{\quad}$

$5 + 1 = \underline{\quad}$

$1 + 1 = \underline{\quad}$

$3 + 1 = \underline{\quad}$

$2 + 1 = \underline{\quad}$

$5 + 1 = \underline{\quad}$

$3 + 3 = \underline{\quad}$

$4 + 2 = \underline{\quad}$

$2 + 2 = \underline{\quad}$

$4 + 1 = \underline{\quad}$

$6 + 2 = \underline{\quad}$

$1 + 1 = \underline{\quad}$

$3 + 2 = \underline{\quad}$

$6 + 1 = \underline{\quad}$

$7 + 0 = \underline{\quad}$

RECHNE!

$$5 - 2 = \underline{\quad}$$

$$2 - 2 = \underline{\quad}$$

$$3 - 2 = \underline{\quad}$$

$$7 - 2 = \underline{\quad}$$

$$4 - 2 = \underline{\quad}$$

$$2 - 2 = \underline{\quad}$$

$$6 - 2 = \underline{\quad}$$

$$5 - 2 = \underline{\quad}$$

$$4 - 2 = \underline{\quad}$$

$$7 - 2 = \underline{\quad}$$

$$4 - 1 = \underline{\quad}$$

$$3 - 1 = \underline{\quad}$$

$$7 - 1 = \underline{\quad}$$

$$2 - 2 = \underline{\quad}$$

$$5 - 2 = \underline{\quad}$$

$$6 - 2 = \underline{\quad}$$

$$3 - 2 = \underline{\quad}$$

$$7 - 1 = \underline{\quad}$$

$$2 - 1 = \underline{\quad}$$

$$4 - 2 = \underline{\quad}$$

$$5 - 1 = \underline{\quad}$$

$$6 - 1 = \underline{\quad}$$

ÜBE:



$4 - 2 = \underline{\quad}$

$6 - 1 = \underline{\quad}$

$6 - 2 = \underline{\quad}$

$7 - 3 = \underline{\quad}$

$3 - 1 = \underline{\quad}$

$1 - 1 = \underline{\quad}$

$7 - 1 = \underline{\quad}$

$5 - 2 = \underline{\quad}$

$5 - 3 = \underline{\quad}$

$6 - 1 = \underline{\quad}$

$3 - 3 = \underline{\quad}$

$2 - 2 = \underline{\quad}$

$7 - 2 = \underline{\quad}$

$4 - 1 = \underline{\quad}$

$5 - 2 = \underline{\quad}$

$5 - 1 = \underline{\quad}$

$2 + 2 = \underline{\quad}$

$3 + 1 = \underline{\quad}$

$5 + 2 = \underline{\quad}$

$4 + 1 = \underline{\quad}$

JETZT WARST DU FLEISSIG!