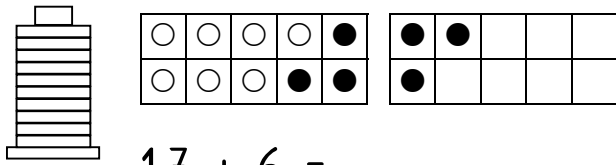
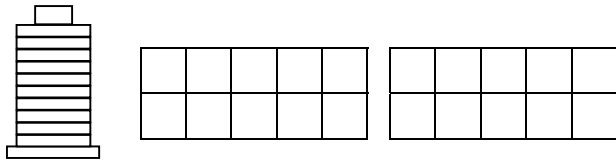


Zeichne und rechne:



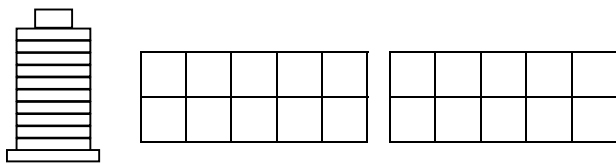
$$17 + 6 =$$

○ $\xrightarrow{\quad}$ ○ $\xrightarrow{\quad}$ ○



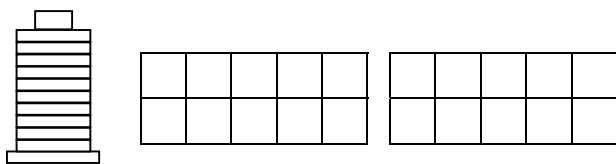
$$18 + 3 =$$

○ $\xrightarrow{\quad}$ ○ $\xrightarrow{\quad}$ ○



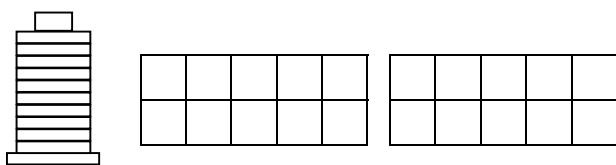
$$16 + 5 =$$

○ $\xrightarrow{\quad}$ ○ $\xrightarrow{\quad}$ ○



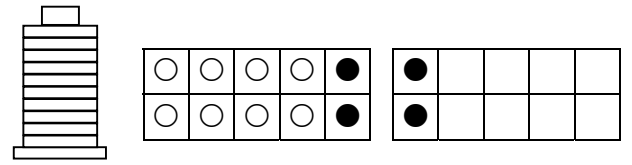
$$19 + 4 =$$

○ $\xrightarrow{\quad}$ ○ $\xrightarrow{\quad}$ ○



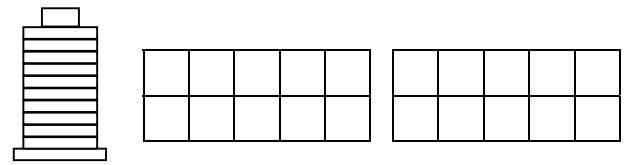
$$15 + 7 =$$

○ $\xrightarrow{\quad}$ ○ $\xrightarrow{\quad}$ ○



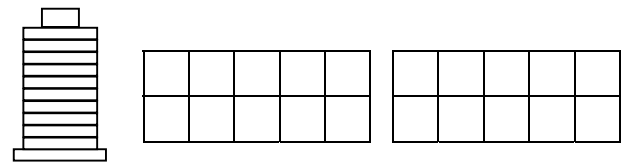
$$22 - 4 =$$

○ $\xrightarrow{\quad}$ ○ $\xrightarrow{\quad}$ ○



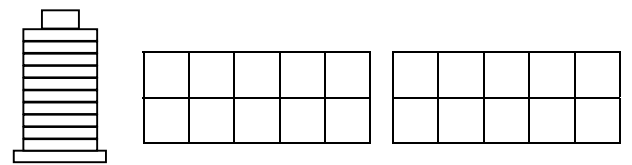
$$21 - 5 =$$

○ $\xrightarrow{\quad}$ ○ $\xrightarrow{\quad}$ ○



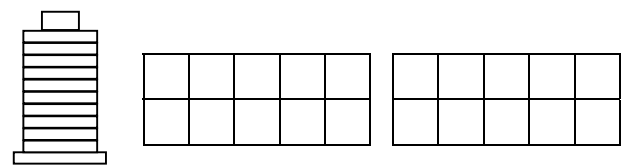
$$23 - 6 =$$

○ $\xrightarrow{\quad}$ ○ $\xrightarrow{\quad}$ ○



$$25 - 8 =$$

○ $\xrightarrow{\quad}$ ○ $\xrightarrow{\quad}$ ○



$$24 - 5 =$$

○ $\xrightarrow{\quad}$ ○ $\xrightarrow{\quad}$ ○

Unter und über den Zehner: