




 20	 21	 22
--------------------------------------------------------------------------------------	--------------------------------------------------------------------------------------	--------------------------------------------------------------------------------------




1	$28 - 6 = \square$
2	$30 - 9 = \square$
3	$27 - 7 = \square$
4	$21 - 1 = \square$
5	$25 - 3 = \square$
6	$27 - 6 = \square$




7	$24 - 2 = \square$
8	$26 - 4 = \square$
9	$29 - 8 = \square$
10	$28 - 8 = \square$
11	$22 - 2 = \square$
12	$24 - 3 = \square$







 22	 23	 24
----------------------------------------------------------------------------------------	----------------------------------------------------------------------------------------	----------------------------------------------------------------------------------------







1	$29 - 6 = \square$
2	$26 - 4 = \square$
3	$28 - 4 = \square$
4	$30 - 8 = \square$
5	$25 - 2 = \square$
6	$22 - 0 = \square$







7	$30 - 6 = \square$
8	$28 - 4 = \square$
9	$29 - 7 = \square$
10	$30 - 7 = \square$
11	$26 - 2 = \square$
12	$27 - 5 = \square$






 24	 25	 26
--------------------------------------------------------------------------------------	--------------------------------------------------------------------------------------	--------------------------------------------------------------------------------------

 26	 27	 28
----------------------------------------------------------------------------------------	----------------------------------------------------------------------------------------	----------------------------------------------------------------------------------------

1	 30 - 4 = <input type="text"/>
2	 25 - 1 = <input type="text"/>
3	 28 - 2 = <input type="text"/>
4	 24 - 0 = <input type="text"/>
5	 26 - 1 = <input type="text"/>
6	 29 - 4 = <input type="text"/>

7	29 - 5 = <input type="text"/> 
8	26 - 2 = <input type="text"/> 
9	30 - 5 = <input type="text"/> 
10	28 - 3 = <input type="text"/> 
11	30 - 6 = <input type="text"/> 
12	27 - 3 = <input type="text"/> 

1	 30 - 3 = <input type="text"/>
2	 28 - 2 = <input type="text"/>
3	 29 - 3 = <input type="text"/>
4	 27 - 0 = <input type="text"/>
5	 30 - 2 = <input type="text"/>
6	 27 - 1 = <input type="text"/>

7	30 - 4 = <input type="text"/> 
8	28 - 1 = <input type="text"/> 
9	26 - 0 = <input type="text"/> 
10	27 - 1 = <input type="text"/> 
11	29 - 2 = <input type="text"/> 
12	29 - 1 = <input type="text"/> 