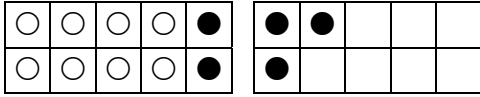
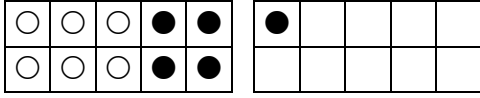


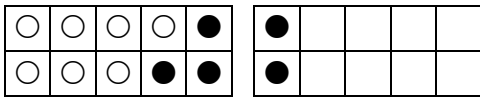
Zeichne und rechne:

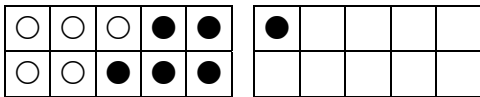


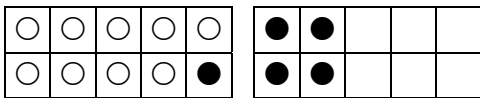
$$8 + 5 = \underline{\quad}$$

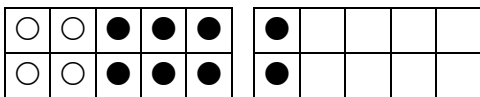


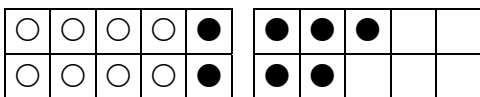
$$6 + \underline{\quad}$$

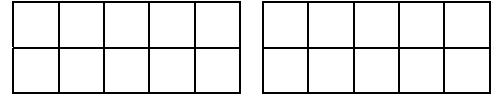




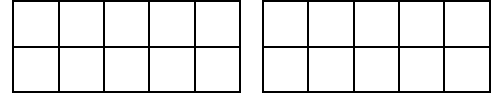




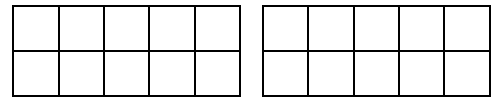




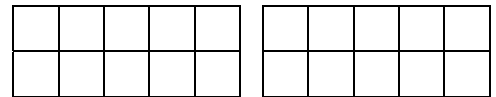
$$8 + 4 = \underline{\quad}$$



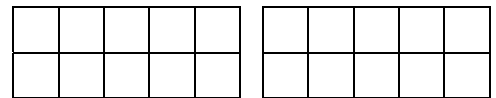
$$6 + 6 = \underline{\quad}$$



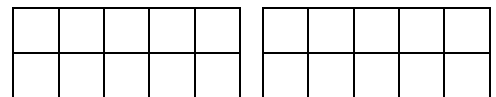
$$7 + 4 = \underline{\quad}$$



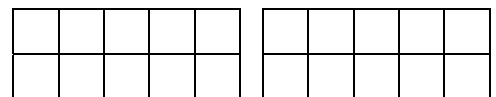
$$5 + 7 = \underline{\quad}$$



$$9 + 4 = \underline{\quad}$$



$$4 + 7 = \underline{\quad}$$



$$8 + 6 = \underline{\quad}$$

Über den Zehner