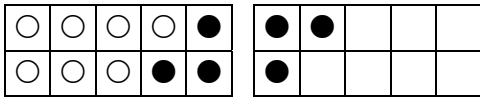
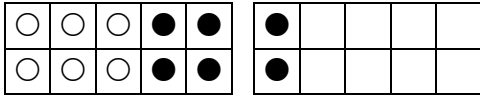
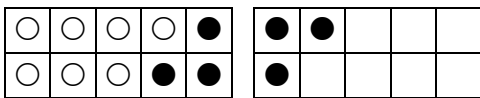


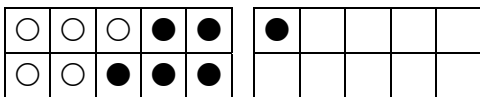
Zeichne und rechne:

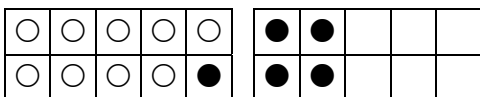


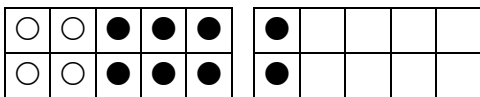
$$13 - 6 = \underline{\quad}$$

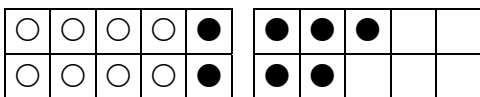


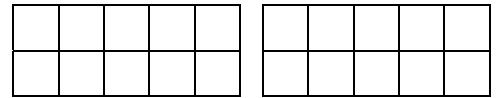




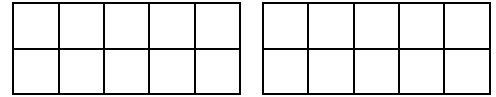




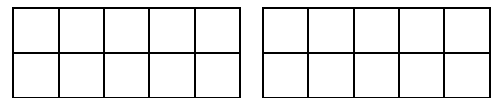




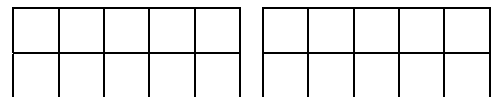
$$13 - 4 = \underline{\quad}$$



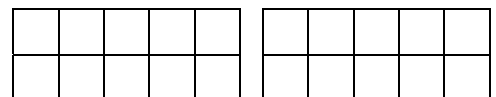
$$12 - 5 = \underline{\quad}$$



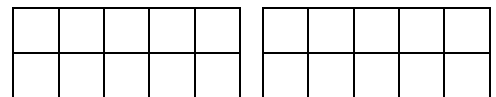
$$13 - 7 = \underline{\quad}$$



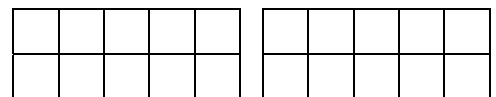
$$11 - 3 = \underline{\quad}$$



$$14 - 6 = \underline{\quad}$$



$$12 - 6 = \underline{\quad}$$



$$15 - 6 = \underline{\quad}$$

Unter den Zehner: