




























 12	 13	 14
--	--	--




1	 $10 + 2 = \square$
2	 $10 + 3 = \square$
3	 $11 + 1 = \square$
4	 $12 + 2 = \square$
5	 $10 + 0 = \square$
6	 $13 + 1 = \square$




7	$13 + 0 = \square$ 
8	$11 + 3 = \square$ 
9	$12 + 1 = \square$ 
10	$12 + 0 = \square$ 
11	$10 + 4 = \square$ 
12	$11 + 2 = \square$ 







 14	 15	 16
--	--	--







1	 $10 + 4 = \square$
2	 $12 + 3 = \square$
3	 $16 + 0 = \square$
4	 $14 + 2 = \square$
5	 $13 + 3 = \square$
6	 $11 + 4 = \square$







7	$11 + 3 = \square$ 
8	$15 + 0 = \square$ 
9	$12 + 4 = \square$ 
10	$13 + 2 = \square$ 
11	$15 + 1 = \square$ 
12	$10 + 5 = \square$ 






 16	 17	 18
--	--	--

 18	 19	 20
--	--	--

1	 11 + 5 = <input type="text"/>
2	 13 + 4 = <input type="text"/>
3	 10 + 6 = <input type="text"/>
4	 18 + 0 = <input type="text"/>
5	 12 + 4 = <input type="text"/>
6	 14 + 3 = <input type="text"/>

7	12 + 5 = <input type="text"/> 
8	10 + 8 = <input type="text"/> 
9	12 + 6 = <input type="text"/> 
10	11 + 6 = <input type="text"/> 
11	14 + 2 = <input type="text"/> 
12	17 + 0 = <input type="text"/> 

1	 12 + 7 = <input type="text"/>
2	 12 + 8 = <input type="text"/>
3	 11 + 7 = <input type="text"/>
4	 14 + 5 = <input type="text"/>
5	 18 + 2 = <input type="text"/>
6	 20 + 0 = <input type="text"/>

7	15 + 5 = <input type="text"/> 
8	14 + 4 = <input type="text"/> 
9	10 + 8 = <input type="text"/> 
10	19 + 0 = <input type="text"/> 
11	13 + 5 = <input type="text"/> 
12	11 + 8 = <input type="text"/> 