

$9 - \square = 0$

$8 - \square = 1$

$10 - \square = 2$


$7 - \square = 3$

$3 + \square = 8$


$2 + \square = 8$

$6 + \square = 9$


$8 + \square = 10$



$$+ 0 = 10$$



$$+ 8 = 9$$



$$+ 2 = 2$$

9	7	8
4	5	6
3	2	10
1	0	

Karten: Magnetmaterial Ergänzen Zahlenraum 10