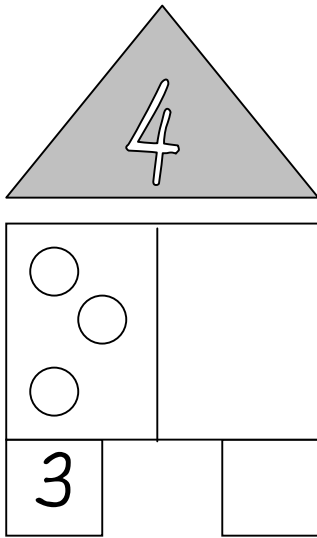
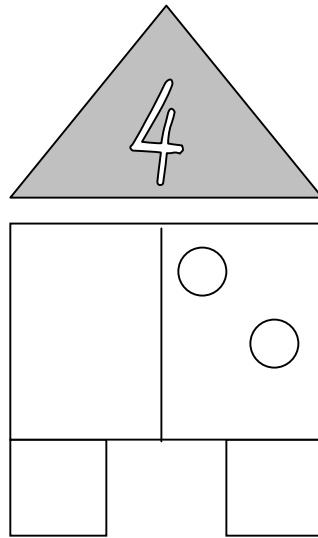


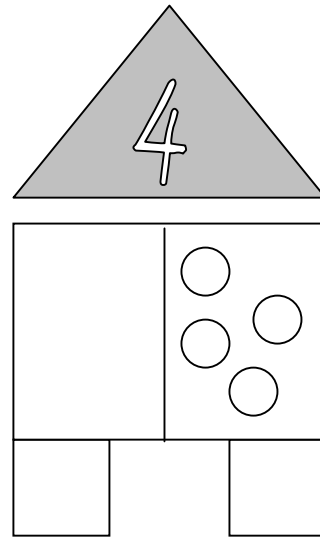
 Zerlege die Zahlen! Male an! Schreibe die Zahl!



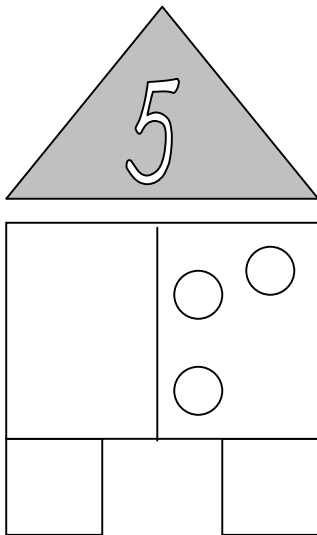
A house-shaped diagram with a grey triangular roof containing the number 4. The main body is a rectangle divided into two vertical rooms. The left room contains three circles. The right room is empty. Below the rectangle are three boxes: the left one contains the number 3, and the other two are empty.



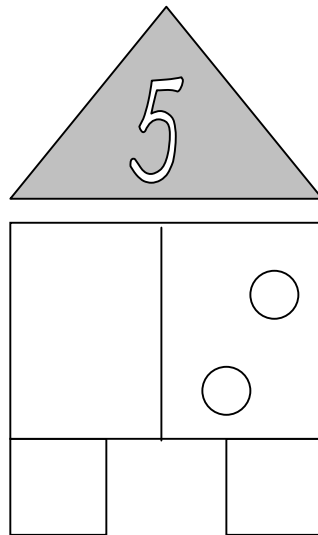
A house-shaped diagram with a grey triangular roof containing the number 4. The main body is a rectangle divided into two vertical rooms. The left room is empty. The right room contains two circles. Below the rectangle are three empty boxes.



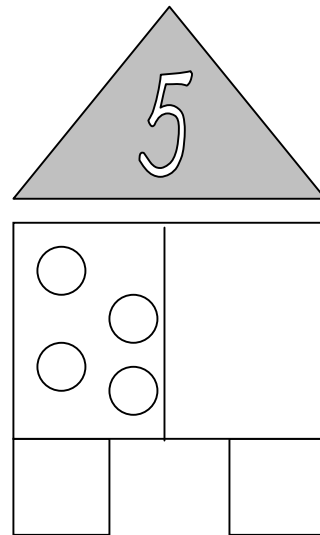
A house-shaped diagram with a grey triangular roof containing the number 4. The main body is a rectangle divided into two vertical rooms. The left room is empty. The right room contains four circles. Below the rectangle are three empty boxes.



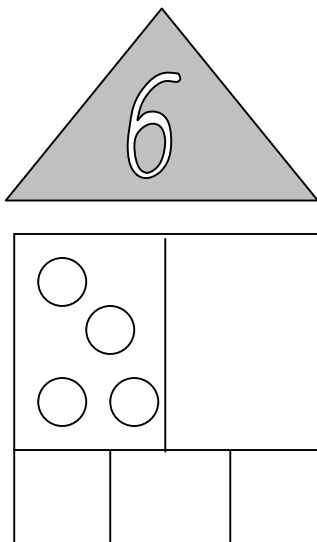
A house-shaped diagram with a grey triangular roof containing the number 5. The main body is a rectangle divided into two vertical rooms. The left room is empty. The right room contains three circles. Below the rectangle are three empty boxes.



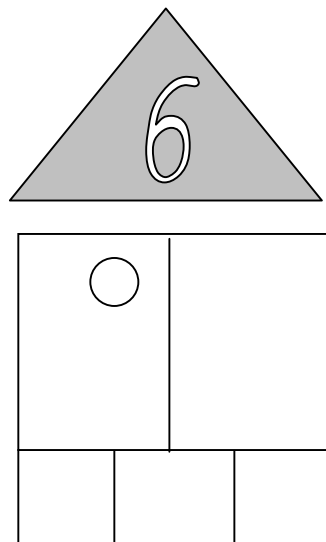
A house-shaped diagram with a grey triangular roof containing the number 5. The main body is a rectangle divided into two vertical rooms. The left room is empty. The right room contains two circles. Below the rectangle are three empty boxes.



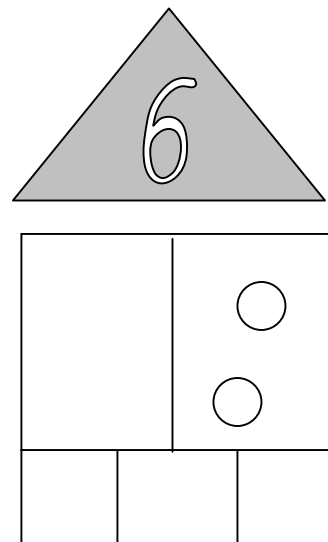
A house-shaped diagram with a grey triangular roof containing the number 5. The main body is a rectangle divided into two vertical rooms. The left room contains four circles. The right room is empty. Below the rectangle are three empty boxes.



A house-shaped diagram with a grey triangular roof containing the number 6. The main body is a rectangle divided into two vertical rooms. The left room contains four circles. The right room is empty. Below the rectangle are three empty boxes.



A house-shaped diagram with a grey triangular roof containing the number 6. The main body is a rectangle divided into two vertical rooms. The left room contains one circle. The right room is empty. Below the rectangle are three empty boxes.



A house-shaped diagram with a grey triangular roof containing the number 6. The main body is a rectangle divided into two vertical rooms. The left room is empty. The right room contains two circles. Below the rectangle are three empty boxes.

 Zerlege die Zahlen! Male an! Schreibe die Zahl!

4

○	○
○	○
2	

4

○	
○	○
○	

4

	○
	○
	○
0	

5

	○
○	○
	○
	○
	○

5

○	
○	○
	○
	○
	○

5

○	
○	
○	
○	
○	

6

	○
○	○
	○
	○
	○

6

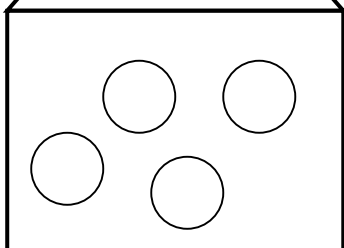
○	○
○	○
	○
	○
	○

6

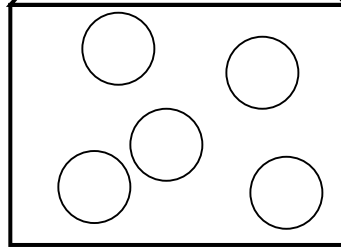
○	○
○	
○	○
	○

 Zerlege die Zahlen! Male an! Schreibe die Zahl!

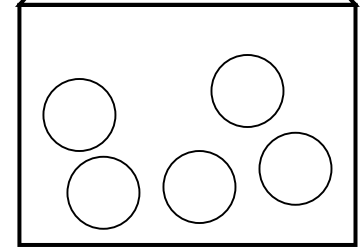
4



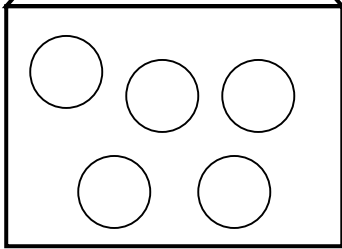
5



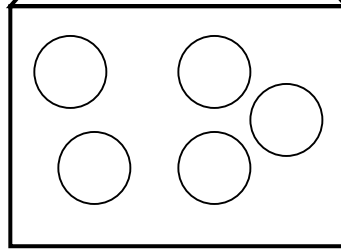
5



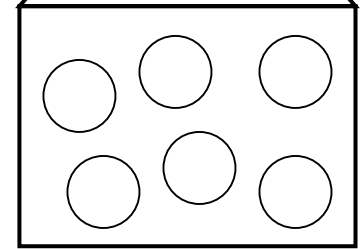
5



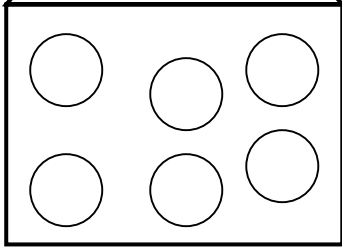
5



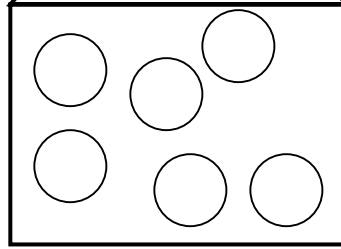
6



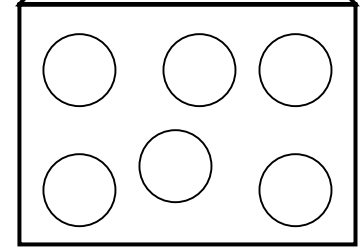
6



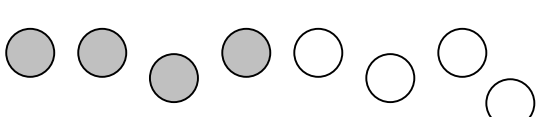
6



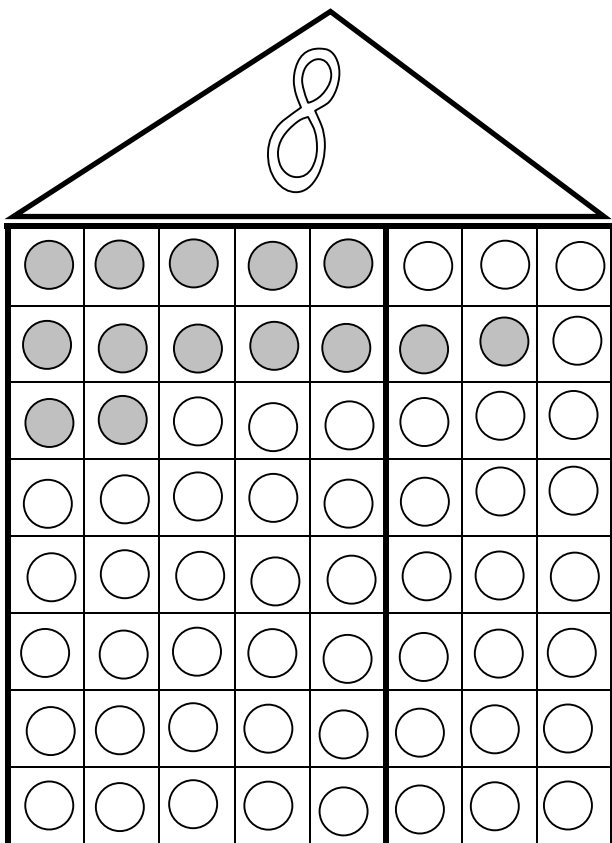
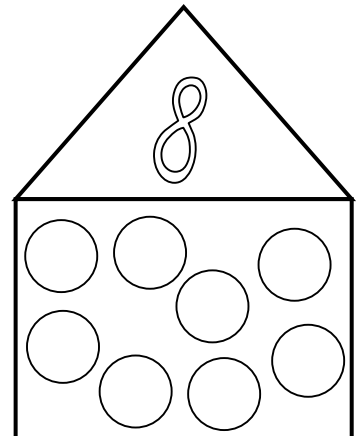
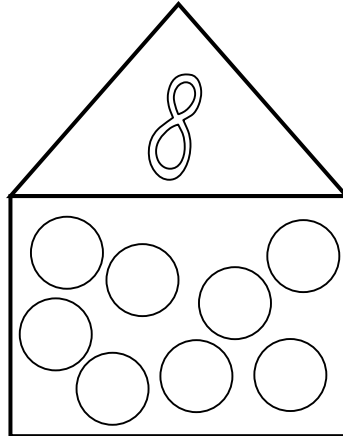
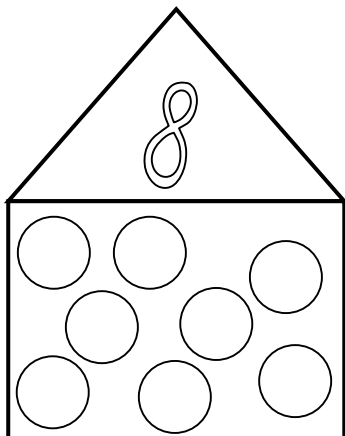
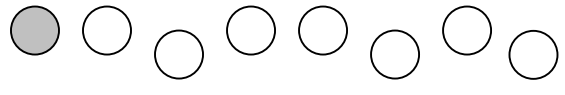
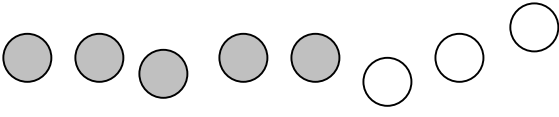
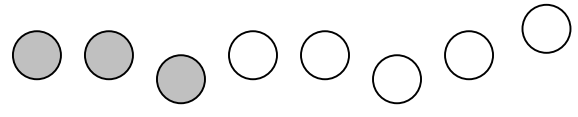
6



Zerlege die Zahl 8!




4



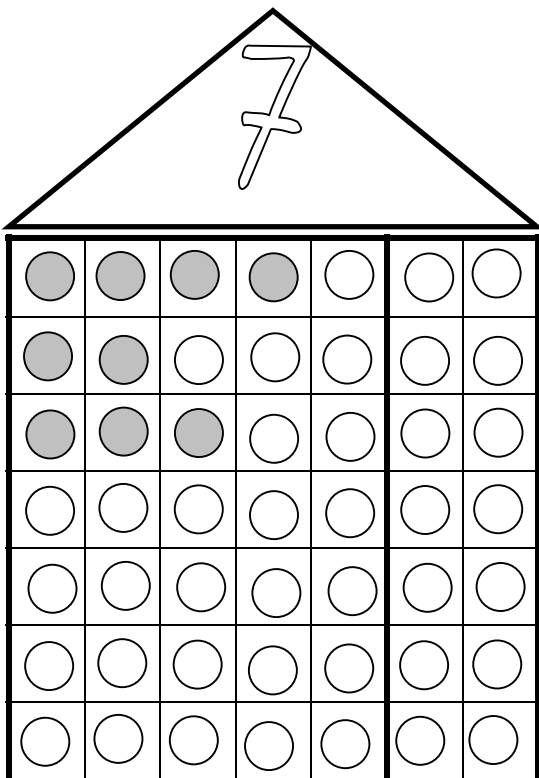
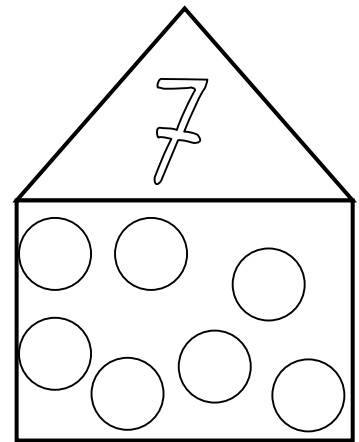
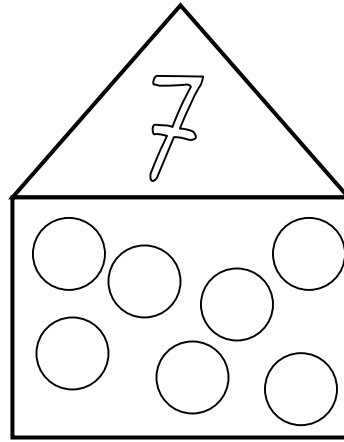
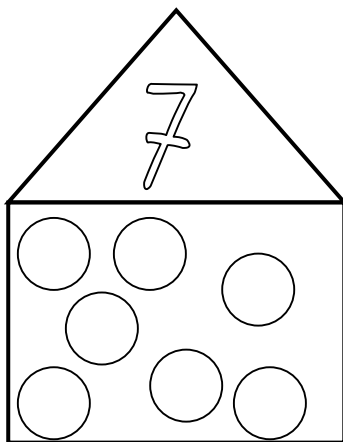



5	+	3	=	8
7	+	<input type="checkbox"/>	=	8
2	+	<input type="checkbox"/>	=	8
4	+	<input type="checkbox"/>	=	8
1	+	<input type="checkbox"/>	=	8
3	+	<input type="checkbox"/>	=	8
0	+	<input type="checkbox"/>	=	8
6	+	<input type="checkbox"/>	=	8



Zerlege die Zahl 7!



3



4	+	3	=	7
2	+		=	7
3	+		=	7
6	+		=	7
0	+		=	7
1	+		=	7
5	+		=	7

